




NAME _____ DATE _____


MATCH CLOCKS AND TIMES

Match the clocks to the times.




● Half past nine.

● 2 : 30



● Half past six.

● Half past two.



● 6 : 30

● 9 : 30